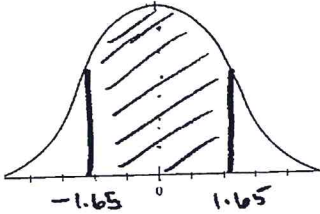


THE STANDARD NORMAL CURVE Worksheet

For each of the problems below, be sure to **SKETCH** the standard normal curve and **SHADE IN** the area you are being asked to find. See the following example:

Find the area under the standard normal curve that lies between $z = -1.65$ and $z = 1.65$

From the table in the text, or using the Normal83 program, the area = $2(.4505) = .901$
The related probability statement is $P(-1.65 < z < 1.65) = .901$ or 90.1%

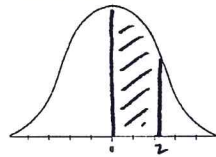


The shaded area is .901 or 90.1% of the entire area.

1. You find the area under the standard normal curve that lies between:

Sketch

Area



a) $z = 0$ and $z = 2$

b) $z = 0$ and $z = 3$

c) $z = -3$ and $z = 3$

d) $z = 0$ and $z = 1.70$

e) $z = -1.70$ and $z = 2$

f) $z = 1.70$ and $z = 2.70$

2. Find the **AREA** under the standard normal curve:

SKETCH:

a) **to the left** of $z = -0.40$

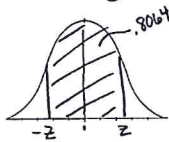
b) for $z < 0.40$

c) **to the right** of $z = 1.65$

d) **to the right** of $z = -1.65$

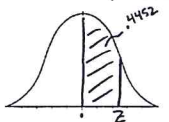
e) **outside** the interval from $z = -2.00$ to $z = 2.00$

3. Solve for z in each of the following (I have shaded in the areas, you find the z value that gives the correct area.):



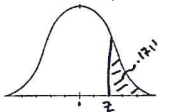
a) Area = 80.64%

$z =$



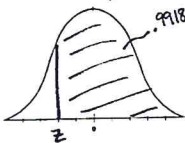
b) Area = 44.52%

$z =$



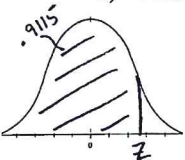
c) Area = 17.11%

$z =$



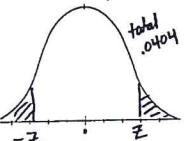
d) Area = 99.18%

$z =$



e) Area = 91.15%

$z =$



f) Combined area = 4.04%

$z =$